

Number bonds to 10



Can you find the two numbers which total 10? Circle them.

9 1
7

9 5
5

10 5
0

4 7
3

2 8
0

10 6
4

8 4
2

9 1
5

1 0
10

5 5
0

10 6
4

3 7
9

Number bonds to 10



Can you find the two numbers which total 10? Circle them.

9 1
7

9 5
5

10 5
0

4 7
3

2 8
0

10 6
4

8 4
2

9 1
5

1 0
10

5 5
0

10 6
4

3 7
9

Number bonds to 10



Can you find the two numbers which total 10? Circle them.

7	1
9	4

5	7
5	8

10	0
8	5

5	6
7	3

2	8
6	6

9	5
1	10

4	2
3	6

3	8
7	4

0	6
2	10

0	8
2	4

1	9
0	4

10	4
0	2

Number bonds to 10



Can you find the two numbers which total 10? Circle them.

7	1
9	4

5	7
5	8

10	0
8	5

5	6
7	3

2	8
6	6

9	5
1	10

4	2
3	6

3	8
7	4

0	6
2	10

0	8
2	4

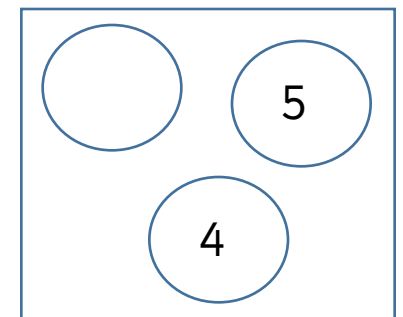
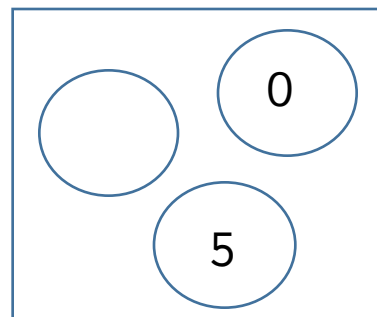
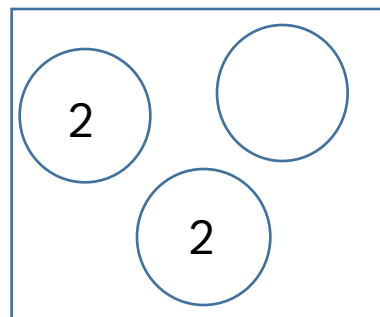
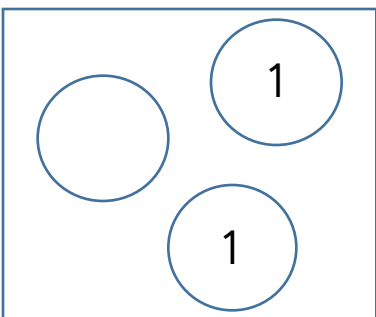
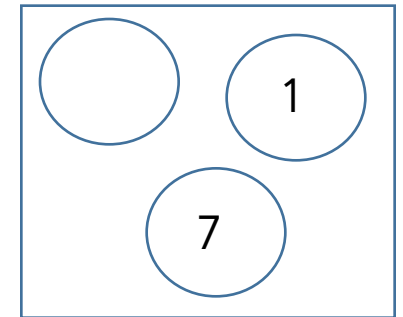
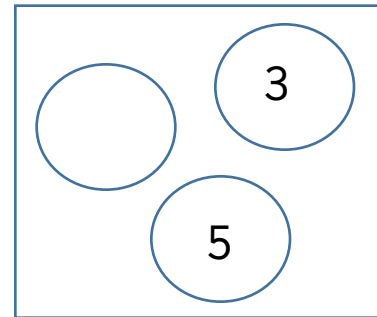
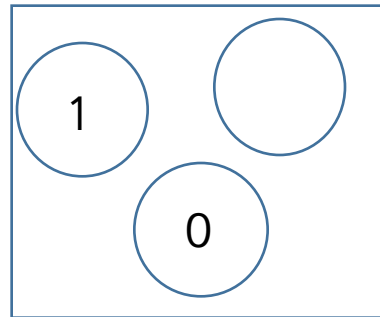
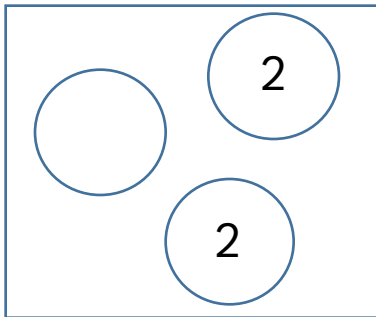
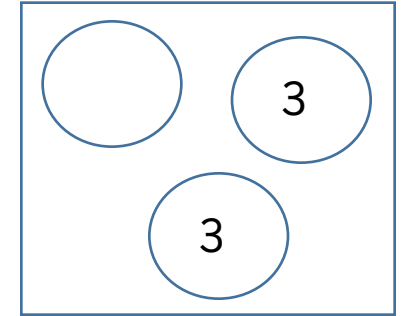
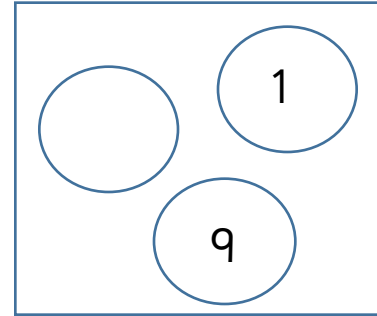
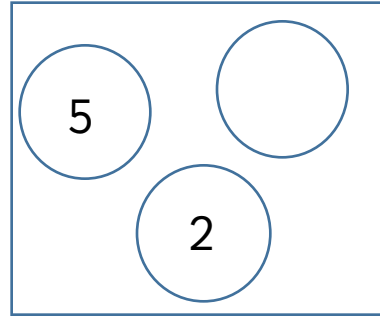
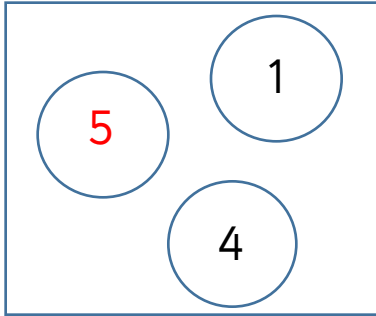
1	9
0	4

10	4
0	2

Number bonds to 10



The numbers in each box add up to 10. Can you find the missing number?



Number bonds to 10



The numbers in each box add up to 10. Can you find the missing number?

