

SUBTRACT A 2-DIGIT
NUMBER FROM A
3-DIGIT NUMBER -
CROSSING 10 OR 100



GET READY



1) Which of these calculations are equal to 1?

$6 - 7$

$7 - 6$

$6 - 5$

$5 - 6$

2) 1 ten is equal to _____ ones

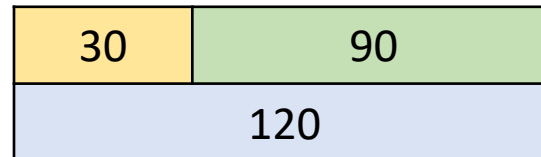
1 hundred is equal to _____ tens

3) Complete the calculations

$120 - 30 = \underline{\hspace{2cm}}$

$120 - \underline{\hspace{2cm}} = 30$

$90 = \underline{\hspace{2cm}} - 30$



1) Which of these calculations are equal to 1?

$$6 - 7 \quad \textcircled{7 - 6} \quad \textcircled{6 - 5} \quad 5 - 6$$

2) 1 ten is equal to 10 ones

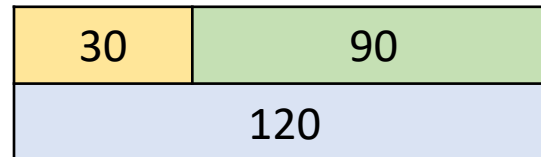
1 hundred is equal to 10 tens

3) Complete the calculations

$$120 - 30 = \underline{90}$$

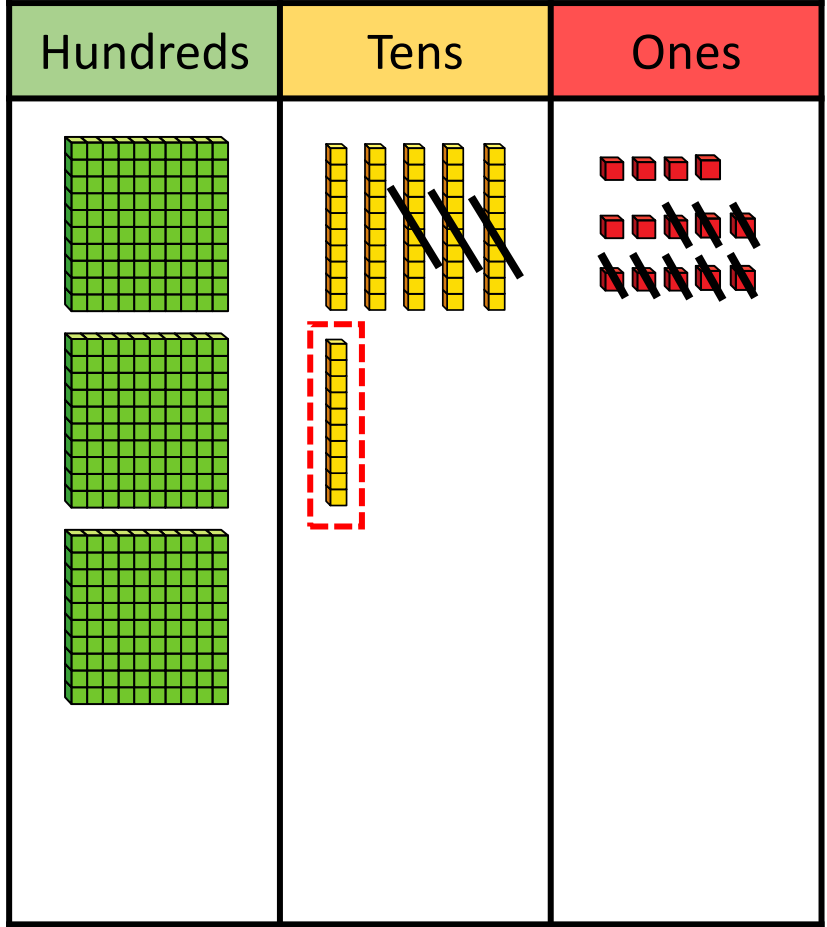
$$120 - \underline{90} = 30$$

$$90 = \underline{120} - 30$$

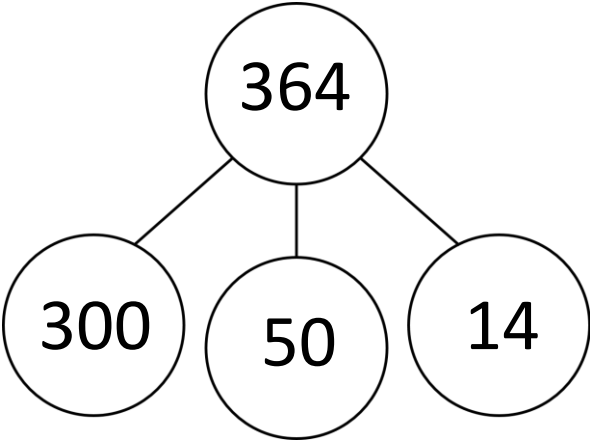


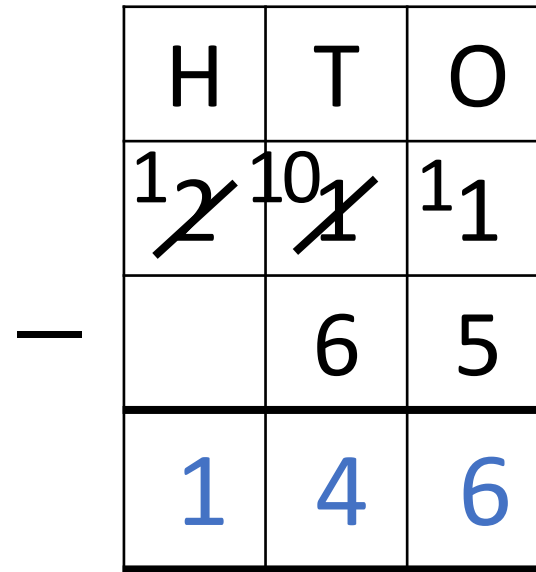
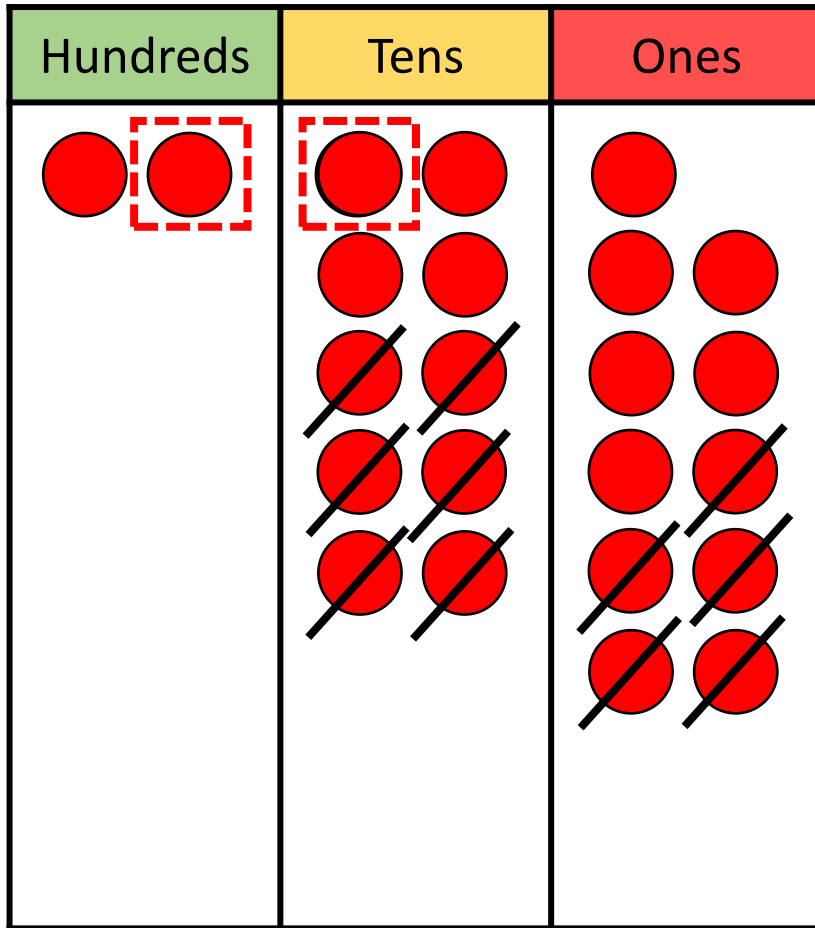
LET'S LEARN





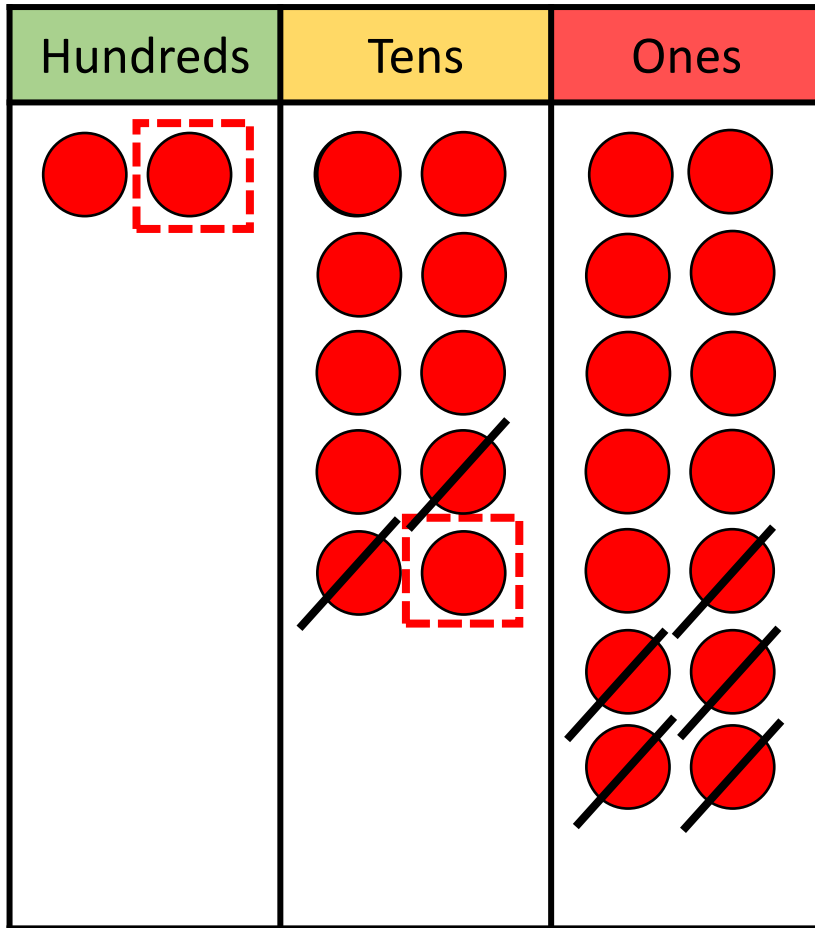
H	T	O
3	5	¹ 4
	3	8
3	2	6






Have a think





H	T	O
1 2	⁹ 1 0	¹ 4
	2	5
1	7	9

Have a think 

	H	T	O
—	4	5	6
		3	9
			3

	H	T	O
—	4	6	16
		8	5
			1

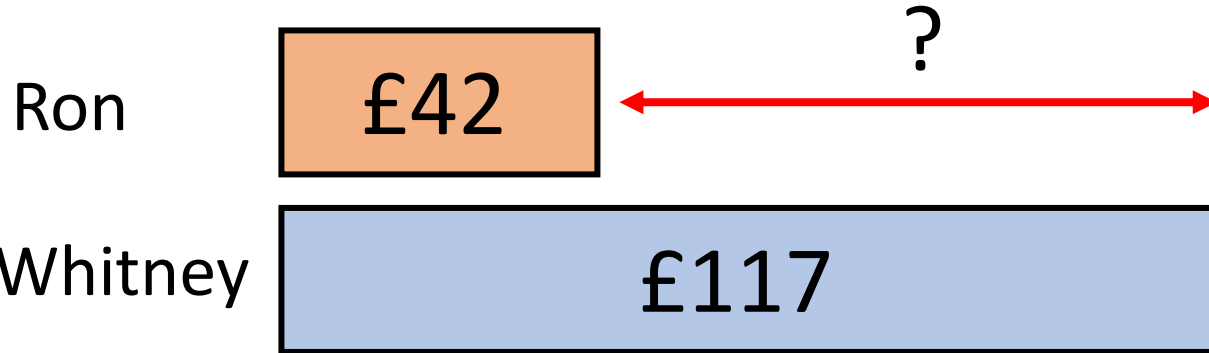
	H	T	O
—	3	0	14
		8	6
			8

YOUR TURN


Have a go at questions
1 – 3 on the worksheet



How much more money does Whitney have than Ron?



Whitney has £75 more



	H	T	O
0 1	1	1	7
		4	2
		7	5

	H	T	O
	5	2 3	¹ 2
—		2	6
	5	0	6

12 ones — ? ones = 6 ones
 2 ones — ? ones = 6 ones
 12 ones — 6 ones = 6 ones

YOUR TURN

Have a go at the rest of
the questions on the
worksheet

