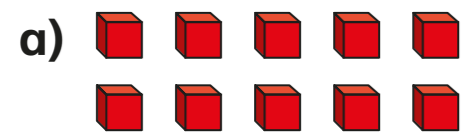
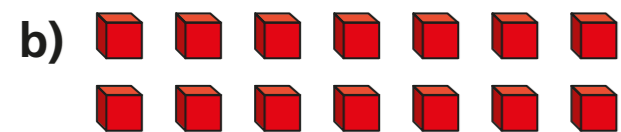


Add 2-digit numbers (2)

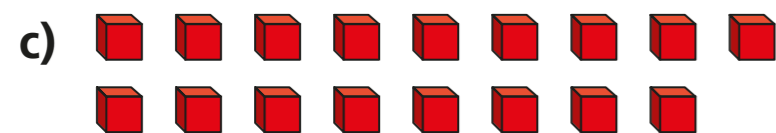
1 Count the ones and complete the sentences.



ones = ten



ones = ten and ones



ones = ten and ones

2

Tens	Ones
+	

Add the ones.

ones + ones = ones

ones = ten + ones

Add the tens.

tens + tens = tens

Complete the addition.

+ =



3 Use base 10 to complete the additions.

- | | |
|-------------------------------------|-------------------------------------|
| a) $7 + 4 =$ <input type="text"/> | f) $37 + 14 =$ <input type="text"/> |
| b) $10 + 30 =$ <input type="text"/> | g) $22 + 19 =$ <input type="text"/> |
| c) $17 + 34 =$ <input type="text"/> | h) $48 + 19 =$ <input type="text"/> |
| d) $19 + 21 =$ <input type="text"/> | i) $33 + 29 =$ <input type="text"/> |
| e) $18 + 64 =$ <input type="text"/> | j) $39 + 47 =$ <input type="text"/> |

Can you represent these additions on a number line?



4 Write the addition.

	T	O	
	4	6	
	+	1	5
		6	1
			1

+ =

What does the little 1 represent?
Talk to a partner.



5 Complete the additions.

a)

		T	O	
		5	7	
		+	1	5

c)

		T	O	
		1	7	
		+	7	3

b)

		T	O	
		1	8	
		+	1	9

d)

		T	O	
		6	3	
		+	1	9

6 Fill in the missing digits to complete the number sentence.

 9 + 3 = 62

Compare answers with a partner.
How many different answers can you find?

