



Name: _____ Class: _____



Look at the items below and answer the questions.

rubber ring

rubber duck

beach ball

sunglasses



1 Stig bought a rubber duck, a rubber ring and a pair of sunglasses.

(a) How much did it cost? _____ p

(b) Colour in the coins he could use to pay:



2 Klara bought a beach ball and 2 rubber rings.

(a) How much did it cost? _____ p

(b) Colour in the coins he could use to pay:



3 Manu bought a rubber ring, a beach ball and a pair of sunglasses.



(a) How much did it cost? _____ p

(b) Colour in the coins he could use to pay:



4 Emma paid 13p and bought 3 different things.

Draw the 3 items she bought below.



Using the back of this sheet, think of as many ways of making 12p as you can.