




Telling the Time


We have been learning how to tell the time to the hour and half past the hour.

Draw the hands on the clock to show these times.


Draw what you are doing at each of these times of day.




nine o'clock



twelve o'clock



three o'clock



half past five




Telling the Time


We have been learning how to tell the time to the hour and half past the hour.

Draw the hands on the clock to show these times.


Draw what you are doing at each of these times of day.




half past nine




twelve o'clock



half past three



half past five



seven o'clock



Telling the Time

We have been learning how to tell the time to the hour and half past the hour.

Draw the hands on the clock to show these times.

Draw what you are doing at each of these times of day.



seven o'clock



half past nine



twelve o'clock



half past three



half past five



eleven o'clock